
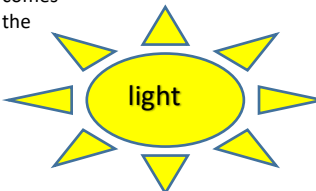
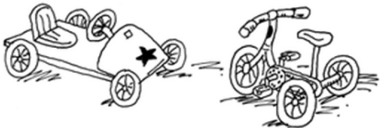

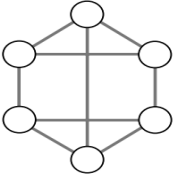




Week 7 04.05.20	TT Rockstars	Arithmetic	Maths	Spelling and Grammar	Main Literacy Activity	Topic								
<p>Monday</p> <p>Remember to have some exercise and mindfulness time</p>	<p>At least 15 minutes! Remember you can challenge your teacher and your friends as well!</p>	<p>Which numbers below can be divided into 3 equal groups without any remainders?</p> <p>28 33 17 6 15 31 26 27</p> <p>Check your answers.</p>	<p>This week we would like you to complete problem solving activities. Take your time to work things out and persevere, don't give up!</p> <p>Susie the snake</p>  <p>Susie the snake has up to 20 eggs.</p> <p>She counted her eggs in fours. She had 3 left over.</p> <p>She counted them in fives. She had 4 left over.</p> <p>How many eggs has Susie got?</p>	<p>Sort the words below into groups of your own choice. It could be how many letters the words have, the initial letter of the words or maybe words that contain 'a' and words that don't. Create a table for how you sort the words.</p> <p>For example</p> <table border="1" data-bbox="1034 335 1384 391"> <thead> <tr> <th>Initial Letter G</th> <th>Initial Letter F</th> </tr> </thead> <tbody> <tr> <td> </td> <td> </td> </tr> </tbody> </table> <p>The words are: grammar fruit forward guard February famous favourite group</p>	Initial Letter G	Initial Letter F			<p>Create your own glossary. Put the words below in alphabetical order and then write definitions for each word!</p> <p>suspicious- crouch- alarmed- mound- defeat- remained- sprawled-</p>	<p>What can you remember about light? Create a thought shower about what you already know. Write down all the things you think of around the sun.</p>  <p>Light comes from the sun.</p> <p>Then, ask an adult what they know about light and share your ideas.</p>				
Initial Letter G	Initial Letter F													
<p>Tuesday</p> <p>Remember to have some exercise and mindfulness time</p>	<p>At least 15 minutes! Remember you can challenge your teacher and your friends as well!</p>	<p>What are the missing numbers in the pattern below?</p> <table border="1" data-bbox="394 821 517 1045"> <tbody> <tr><td>24</td></tr> <tr><td>32</td></tr> <tr><td> </td></tr> <tr><td>48</td></tr> <tr><td>56</td></tr> <tr><td> </td></tr> <tr><td> </td></tr> <tr><td>80</td></tr> </tbody> </table>	24	32		48	56			80	<p>At the toy shop</p> <p>The toy shop stocks tricycles and go-carts. The tricycles have 3 wheels. The go-carts have 5 wheels.</p>  <p>Suna counted the wheels. He counted 37 altogether.</p> <p>How many tricycles are there? How many go-carts?</p> <p>Find two ways to do it.</p>	<p>Using the words from yesterday, complete the sentences and write them out neatly.</p> <ol style="list-style-type: none"> It is important to eat five portions of _____ and vegetables every day. _____ has twenty-eight days and twenty-nine when it is a leap year. If you have a _____ hobby, try to make the time to do it so that you feel good. Actors, actresses, news readers, singers and television presenters are all example of _____ people. 	<p>Below there is a link for a story about Shadows. Please listen to the story carefully.</p> <p>https://www.youtube.com/watch?v=8L52xSUTJNg</p> <p>Answer the questions below.</p> <ol style="list-style-type: none"> Why had the little boy gone outside at the beginning of the story? Why was the boy surprised when he first stood up? Why did the little boy's heart start to beat faster? What was the little boy's sister wondering when she joined him outside? What did the little boy's sister explain to him? 	<p>Today, research the question below.</p> <p>What is light?</p> <p>Write down sentences to answer the question. Remember capital letters and full stops.</p> <p>Then, write definitions for the words below.</p> <p>transparent- opaque- translucent-</p>
24														
32														
48														
56														
80														

<p>Wednesday</p> <p>Remember to have some exercise and mindfulness time</p>	<p>At least 15 minutes! Remember you can challenge your teacher and your friends as well!</p>	<p>Which numbers below can be divided into 6 equal groups without any remainders?</p> <p>36 24 30 22 11 18 30 43</p> <p>Check your answers.</p>	<p>Monster</p> <p>Alesha bought a monster using only silver coins. It cost her 45p.</p>  <p>There are nine different ways to pay 45p exactly using only silver coins. Find as many as you can.</p> <p>What if the monster cost 50p? How many different ways are there to pay now?</p>	<p>Practise spelling the words below.</p> <p>grammar fruit forward guard February famous favourite group</p> <p>Find out what the word grammar means and write a definition.</p>	<p>Read the story again.</p> <p>https://www.youtube.com/watch?v=8L52xSUTjNg</p> <p>How many pairs of rhyming words can you find in the story?</p> <p>Write all the pairs down that you can find.</p>	<p>Watch the video below.</p> <p>https://www.bbc.co.uk/bitesize/clips/zg6r82p</p> <p>What have you learnt from watching the video? Write down 6 facts and draw pictures to go with each fact.</p>
<p>Thursday</p> <p>Remember to have some exercise and mindfulness time</p>	<p>At least 15 minutes! Remember you can challenge your teacher and your friends as well!</p>	<p>Play the money game below. Select the hard level and £!</p> <p>https://natwest.mymoneysense.com/students/students-5-8/the-change-game/</p>	<p>Neighbours</p> <p>Use each of the numbers 1 to 6 once. Write one in each circle.</p>  <p>Numbers next to each other must not be joined. For example, 3 must not be joined to 2 or 4.</p> <p>1 2 3 4 5 6</p>	<p>Write your own sentences using this week's words. Remember punctuation!</p>	<p>PSHE link</p> <p>How did the little girl in the story show kindness?</p> <p>Write down as many ways as you can think of to show ways to be kind to others. You could write your ideas in a heart shape!</p> 	<p>Look around your home, draw and label two things that are transparent, two things that are opaque and two items that are translucent.</p> <p>Then, if you have a garden outside, ask an adult if you can go outside at different times of the day when it is sunny to explore your shadow.</p>

<p>Friday</p> <p>Remember to have some exercise and mindfulness time</p>	<p>At least 15 minutes! Remember you can challenge you teacher and your friends as well!</p>	<p>Play the money match game using the link below. Select matching coins up to £1 and if you can move onto matching coins up to the value of £5. http://www.crickweb.co.uk/ks2numeracy-money-and-mean.html</p>	<p>Kieron's cats</p> <p>Kieron has three cats. Each is a different weight.</p> <p>The first and second weigh 7 kg altogether. The second and third weigh 8 kg altogether. The first and third weigh 11 kg altogether.</p> <p>What is the weight of each cat?</p> 	<p>Create a word search that includes all of the words below.</p> <p>grammar fruit forward guard February famous favourite group</p>	<p>Art link</p> <p>Read the story again and choose your favourite page. Recreate the picture using your art skills.</p> <p>https://www.youtube.com/watch?v=8L52xSUTjNg</p>	<p>How are shadows formed? Watch the videos below.</p> <p>https://www.bbc.co.uk/bitesize/clips/zshxpv4</p> <p>https://www.bbc.co.uk/bitesize/clips/z6fnvcw</p> <p>Read the information on the website below and complete the interactive quiz.</p> <p>http://www.primaryhomeworkhelp.co.uk/revision/Science/light.html</p>
--	--	---	--	---	---	--